


Telling the time to 5 minutes

$$2+2=4$$

Fluency



1) a) Use the time vocabulary to complete the clock.



b) Which one of these times would you be most unlikely to say?
Circle the correct answer.

Twenty
minutes past

Fifty-five
minutes to

Ten minutes to


Telling the time to 5 minutes

$$2+2=4$$

Fluency



2) Draw lines to match the clock to the correct time.



Five minutes
past seven

Five minutes
to twelve

Twenty-five
minutes past
seven

Five minutes
past twelve

Telling the time to 5 minutes

2+2=4

Fluency



3) Write down what time is being shown by each clock.



_____ minutes to _____



_____ minutes past _____



_____ minutes past _____



_____ minutes to _____


Telling the time to 5 minutes

2+2=4


Fluency




4) Draw hands on the clocks to show the times given.




Five minutes past eight



Twenty-five minutes to six



Twenty minutes past seven



Ten minutes to twelve


Telling the time to 5 minutes

$$2+2=4$$

Fluency



5)



Lelise is incorrect.
Explain the mistake she has made.

Telling the time to 5 minutes




Explanation



6)

I leave my house at the time shown on the clock below.
I walk to school which takes me twenty-five minutes.
Draw the time I will arrive at school on the blank clock face.



Telling the time to 5 minutes

$$2+2=4$$


Fluency



ANSWERS

1) a) Use the time vocabulary to complete the clock.

to



past

b) Which one of these times would you be most unlikely to say?
Circle the correct answer.

Twenty minutes past

Fifty-five minutes to

Ten minutes to

Telling the time to 5 minutes

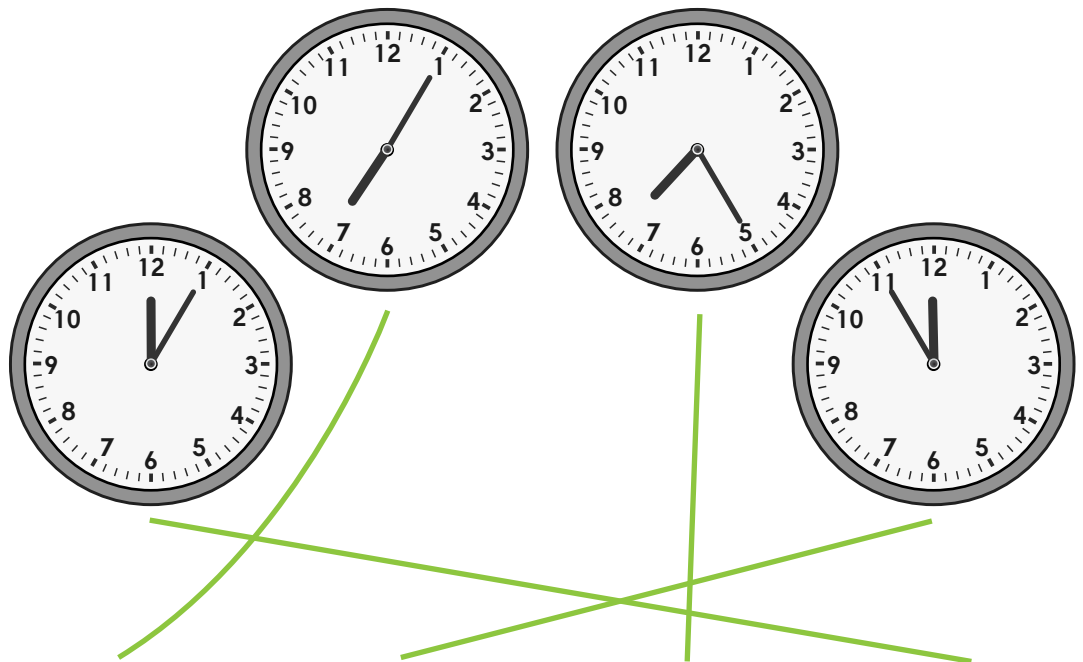
$$2+2=4$$

Fluency



ANSWERS

2) Draw lines to match the clock to the correct time.



Five minutes past seven

Five minutes to twelve

Twenty-five minutes past seven

Five minutes past twelve

Telling the time to 5 minutes

$$2+2=4$$

Fluency



ANSWERS

3) Write down what time is being shown by each clock.



fifteen minutes to four



five minutes past three



twenty-five minutes past twelve



twenty minutes to eleven

Telling the time to 5 minutes

$$2+2=4$$

Fluency



ANSWERS

4) Draw hands on the clocks to show the times given.



Five minutes past eight



Twenty-five minutes to six



Twenty minutes past seven



Ten minutes to twelve

Telling the time to 5 minutes

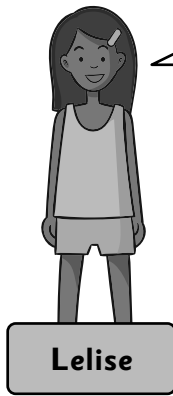
$$2+2=4$$

Fluency



ANSWERS

5)



The time on this clock is 30 minutes past one.



Lelise is incorrect.

Explain the mistake she has made.

The minute hand is the bigger hand. This means it is pointing at the one.

The actual time is five minutes past six.

Telling the time to 5 minutes



Explanation



ANSWERS

6)

I leave my house at the time shown on the clock below.
I walk to school which takes me twenty-five minutes.
Draw the time I will arrive at school on the blank clock face.

